

## Peter and Rosemary Grant's Finches

Name:

Period:

Date:

### Background:

In 1834 Charles Darwin studied birds on the Galapagos Islands. He observed that even though all the birds he saw were finches, the various species had different shaped beaks. He proposed that the finches all descended from a common ancestor, and the beak shapes changed as the birds adapted to eat different foods. It was a great theory, but at the time he had no way to prove it.

More than 100 years later, Peter and Rosemary Grant from Princeton University set out to prove Darwin's hypothesis. They studied medium ground finches on Daphne Major, a tiny island in the Galapagos. They were able to measure the beak depth of the 1,200 finches that live on the island. The finches on this volcanic island eat seeds by cracking them open with their beaks. They found that the finch's beak size was correlated with the size of the seed they ate (large beaked finches ate large seeds, and small beaked finches ate small seeds).

Daphne Major typically receives 130mm of rain per year. Then, in 1977 there was a drought and the island only received 24mm of rain. Because of the little rain, there were fewer seeds growing, and 84% of the birds died of starvation.

**Predict:** Which type of birds do you think survived the drought- finches with big beaks or finches with small beaks? Why?

---

---

---

### Directions:

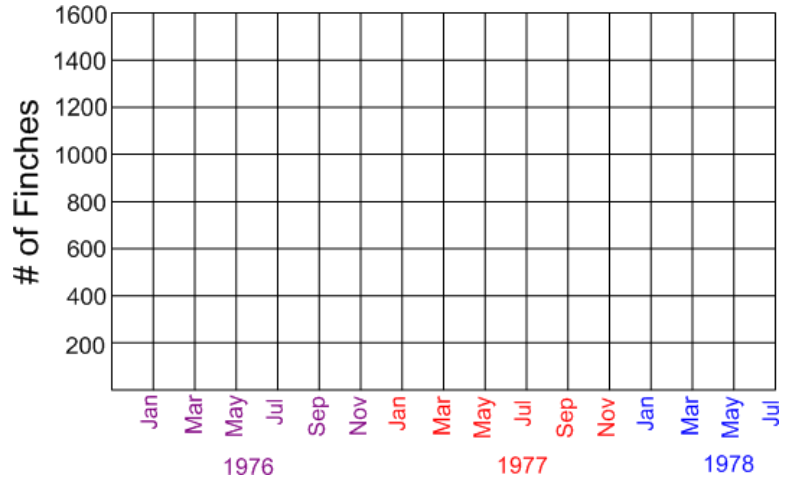
1. You will be completing 3 line graphs on the following page (number of finches, number of seeds, and seed size). The graphs show data from before, during, and after the drought.
2. After plotting your points, connect all the dots.
3. Answer the analysis questions based on the graphs.



CC image courtesy Michael Dvorak on Wikimedia.org

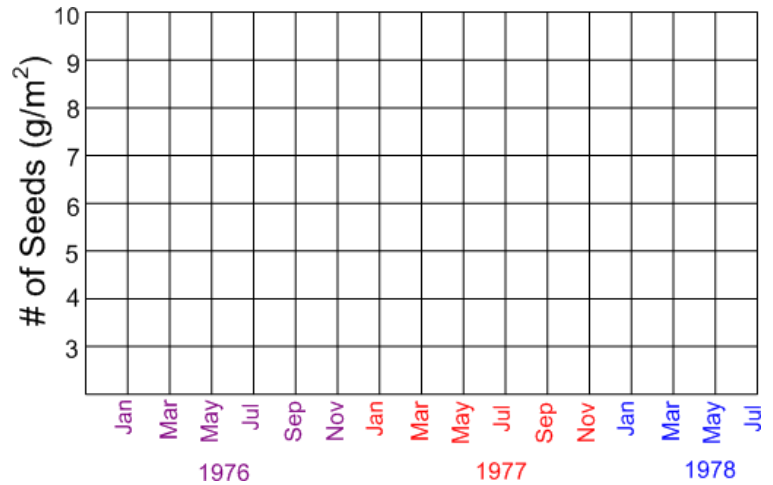
**Graph #1**

Year	# Finches
Jan 1976	1150
April 1976	1400
June 1976	1200
Dec 1976	850
March 1977	600
June 1977	400
Dec 1977	200
June 1978	380



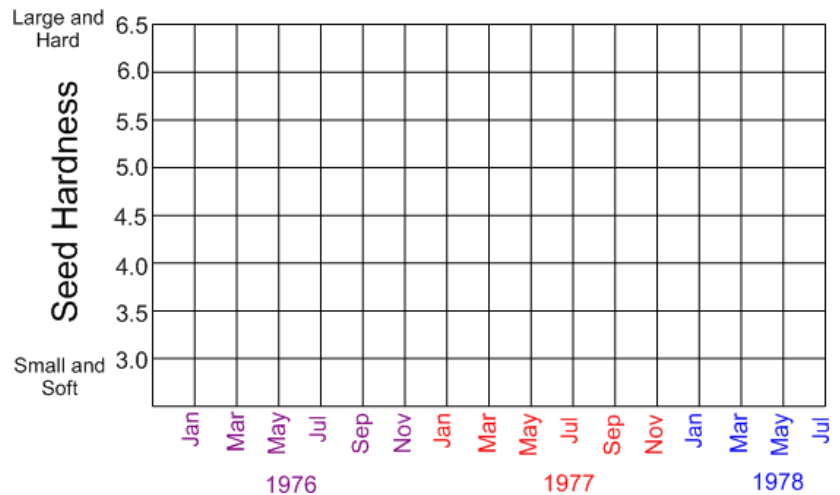
**Graph #2**

Year	# Seeds
Jan 1976	7.5
April 1976	8
June 1976	10
Dec 1976	7.9
March 1977	7.8
June 1977	6
Dec 1977	3
June 1978	3.8



**Graph #3**

Year	Hardness
Jan 1976	4.7
April 1976	4.2
June 1976	3.8
Dec 1976	5.5
March 1977	6.2
June 1977	6
Dec 1977	5.9
June 1978	5.7



## Analysis Questions:

1. What is the relationship between the number of seeds available and the number of finches? (Graphs 1 & 2)

---

---

---

2. Which type of seeds survived after the drought? (Graph #3)

---

---

---

3. Based on the seeds available after the drought, which type of bird do you think survived the drought? Explain your reasoning.

---

---

---

4. In 1983, there was an abundance of rain- 1359mm! Predict what the bird population looked like in 1984. What types of beaks were most common? Explain.

---

---

---

5. How does the Grant's research help prove Darwin's theory of evolution by natural selection?

---

---

---

6. Explain the following statement: "Selection occurs within generations; evolution occurs between generations."

---

---

---